

Name _____ Date _____ Class _____

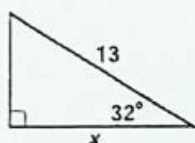
26-D

Identifying the trig ratio and setting up the equation

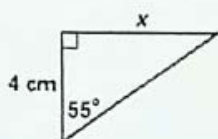
Part I: Look at the given information and the variable in each triangle below. Determine which trig ratio applies to the given information.

Part II: After completing part I, go back to every triangle and write an equation with the given information.

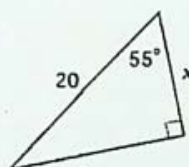
1.



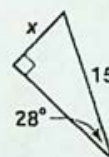
2.



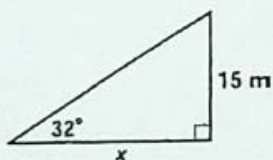
3.



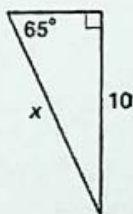
4.



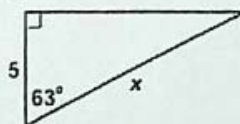
5.



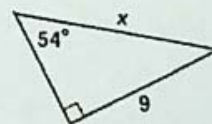
6.



7.



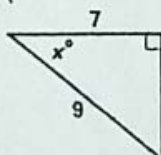
8.



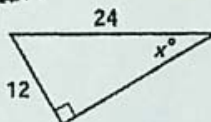
SKIP



SKIP



SKIP



SKIP

