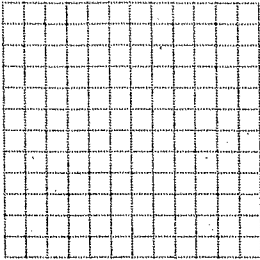


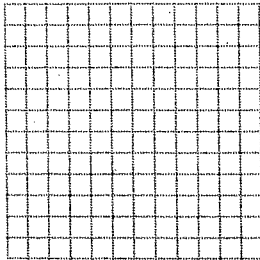
Graphing Lines

Graph

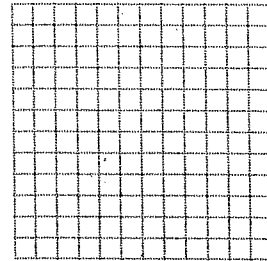
1. $y = x - 2$



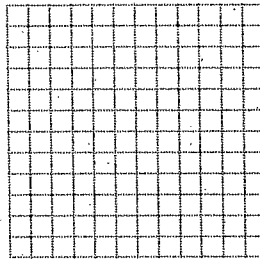
2. $2x + 4 = y$




3. $y - 2x = 5$



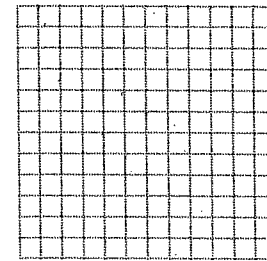
4. $5y + 5x = 10$



5. $6y - 3x = 9$

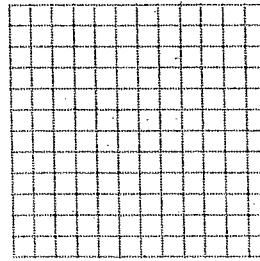


6. $2y + 4x = 14$

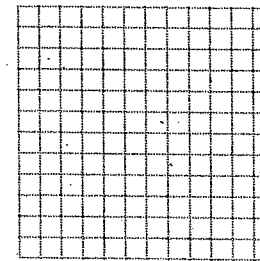


Graph.


7. $x = 2$




8. $y = -\frac{7}{2}$



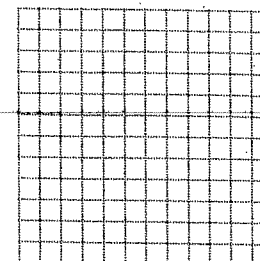
9. $x = -\frac{1}{2}$



10. $3x - y = 4$



11. $y - 5 = 2x$



12. $x + y = 1$

