


Name: _____

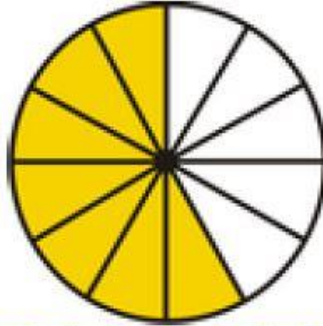
Fraction Review

Per. _____

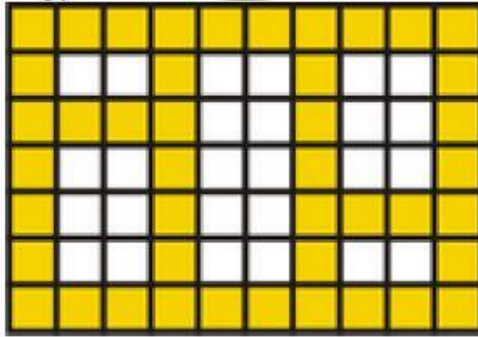
For #1 – 3, determine what fraction of the whole each shaded region represents.



2.



3.



4.

In #4 – 9, find the simplest form of the following rational numbers.

4. $\frac{22}{44}$

7. $\frac{315}{420}$

5. $\frac{9}{27}$

8. $\frac{19}{101}$

6. $\frac{12}{18}$

9. $\frac{99}{11}$

Fraction Review

Name: _____

Per. _____